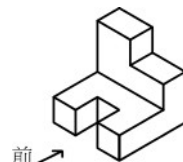
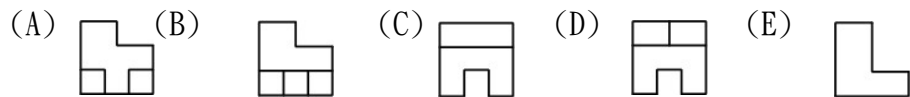


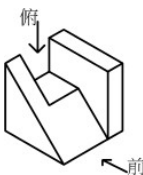
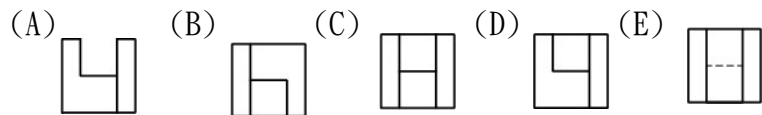
國立北門高級農工職業學校特色招生考古題(土木科)

一、 單選題：(請依題意，選出一個正確或最佳答案)

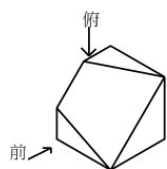
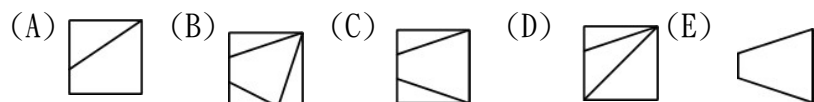
1. (B) 試依箭頭方向選出正確的前視圖：



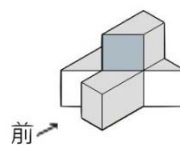
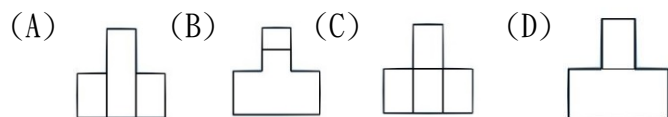
2. (D) 試依指定前視方向選出正確的俯視圖：



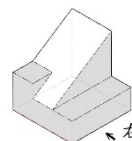
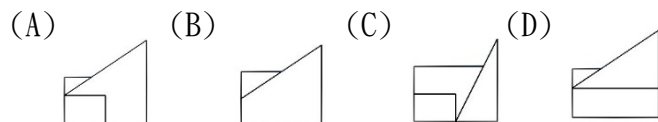
3. (A) 試依指定前視方向選出正確的俯視圖：



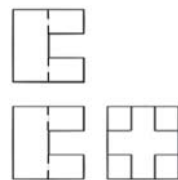
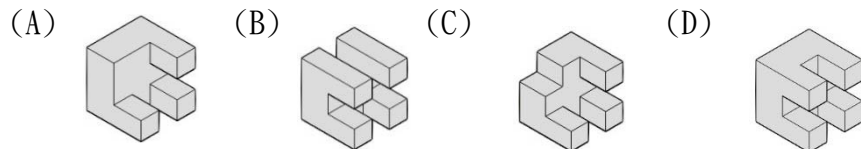
4. (C) 試依指定前視方向選出正確的前視圖：



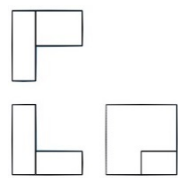
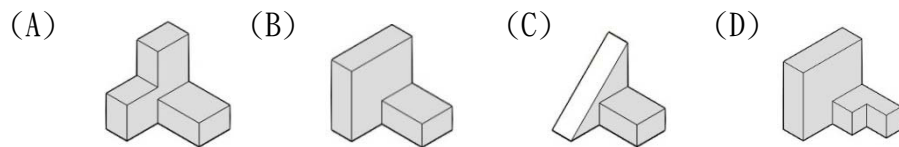
5. (D) 試依指定前視方向選出正確的右側視圖：



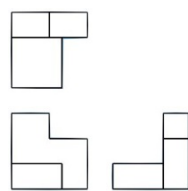
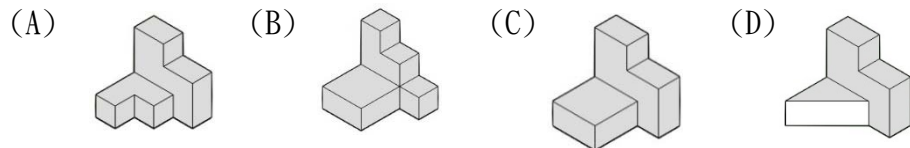
6. (D) 如右圖，已知正投影三視圖，試選出正確的立體圖？



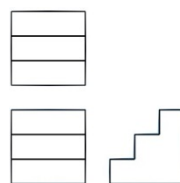
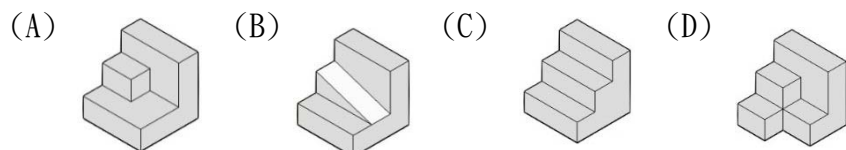
7. (B) 如右圖，已知正投影三視圖，試選出正確的立體圖？



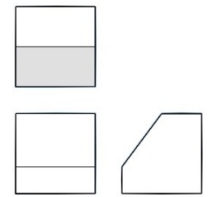
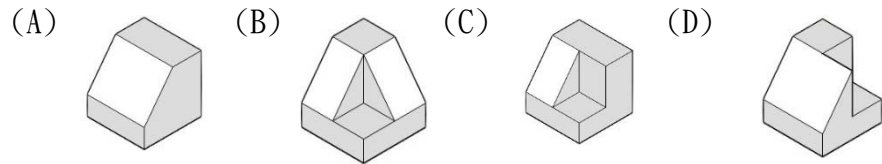
8. (C) 如右圖，已知正投影三視圖，試選出正確的立體圖？



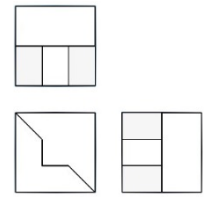
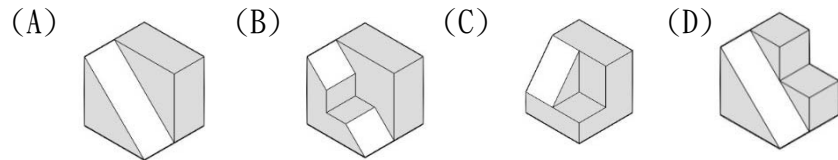
9. (C) 已知三視圖如右圖所示，則其立體圖應為



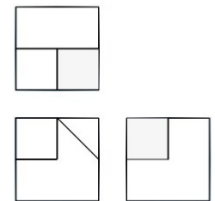
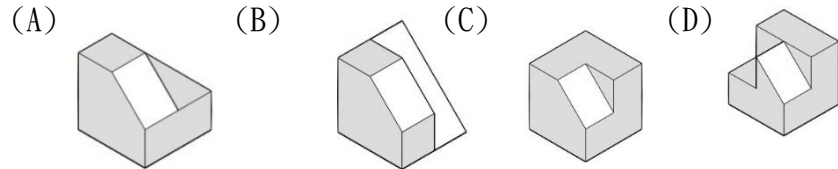
10. (A) 已知三視圖如右圖所示，則其立體圖應為



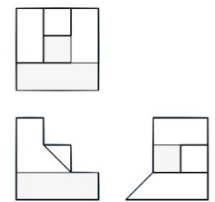
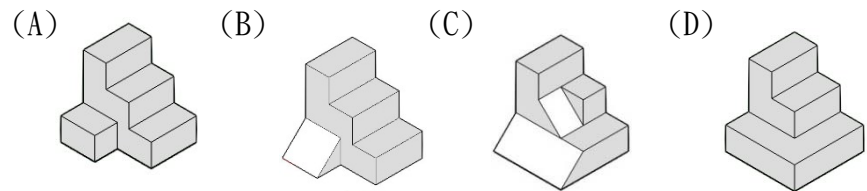
11. (B) 已知三視圖如右圖所示，則其立體圖應為



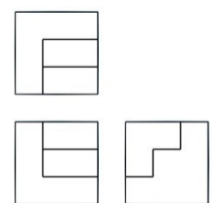
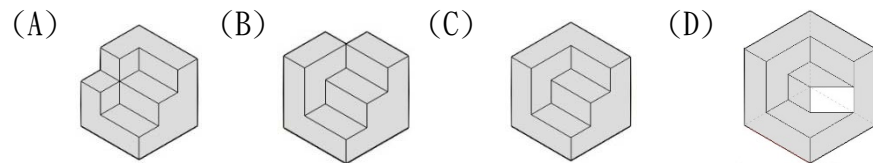
12. (D) 已知三視圖如右圖所示，則其立體圖應為



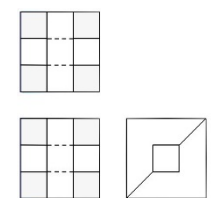
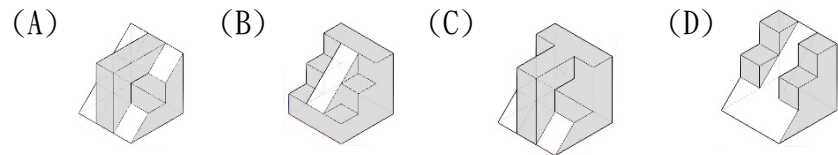
13. (C) 已知三視圖如右圖所示，則其立體圖應為



14. (C) 已知三視圖如右圖所示，則其立體圖應為



15. (A) 已知三視圖如右圖所示，則其立體圖應為

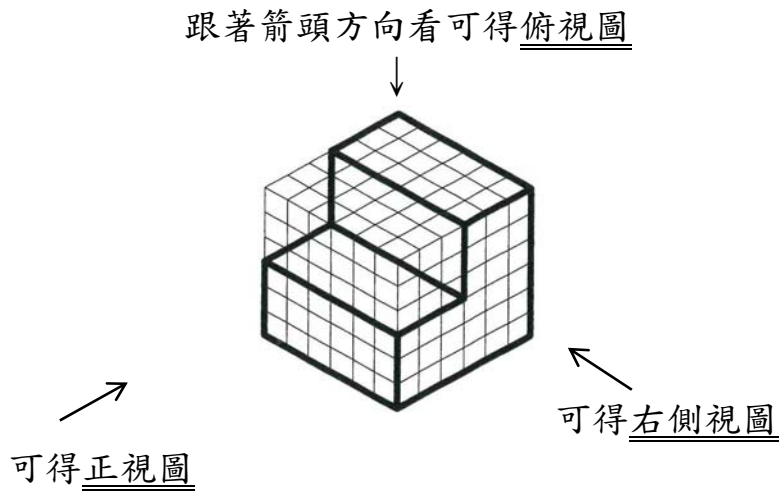


二、作圖題

試題說明：

- 1.請於答案卷作答，否則不予計分。
- 2.請將(1)~(4)立體圖，在答案紙上用筆畫出正確三視圖(俯視圖、正視圖、右側視圖)。
- 3.請參照下圖範例說明：


※題目:立體圖




※答案:畫出三視圖



俯視圖



正視圖





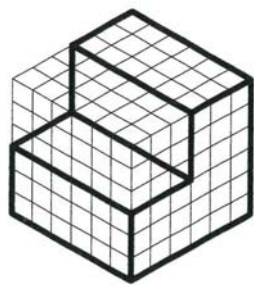
右側視圖

注意:請看立體圖長度，格線輔助，對照出三視圖線條長度。


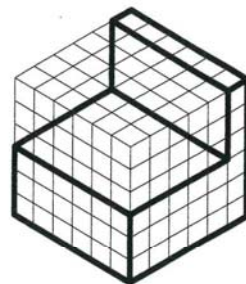
4.每題 10 分，正視圖 4 分，俯視圖 3 分，右側視圖 3 分，各視圖錯誤線條一條扣一分，扣完為止。

作答範例:

範例1



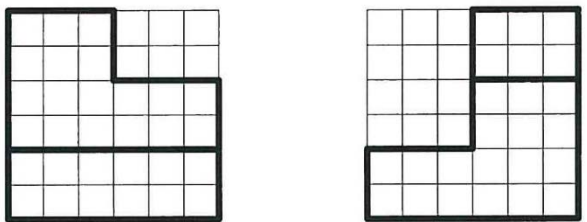
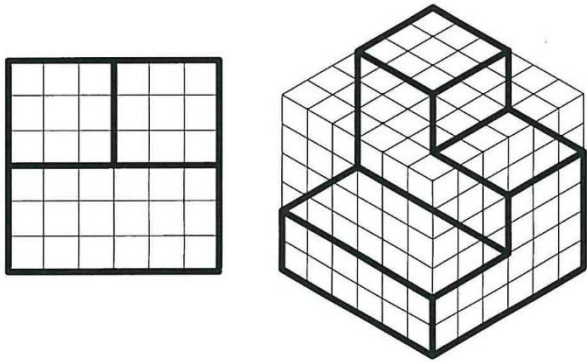
範例2



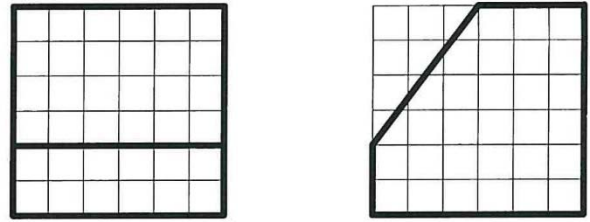
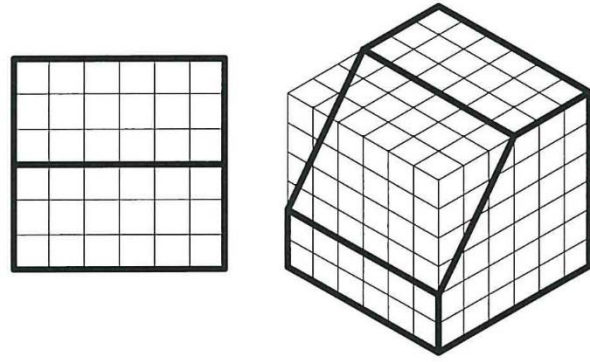
1	2	3	4	5	6	7	8	9	10
B	D	A	C	D	D	B	C	C	A
11	12	13	14	15					
B	D	C	C	A					

二、作圖題：

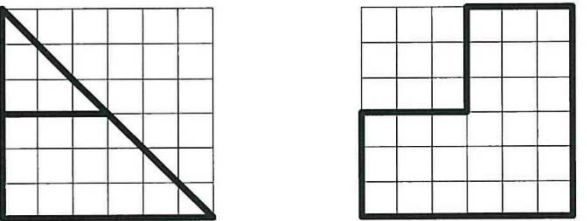
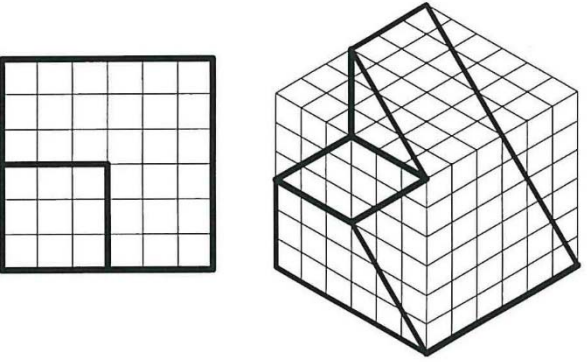
(1)



(2)



(3)



(4)

