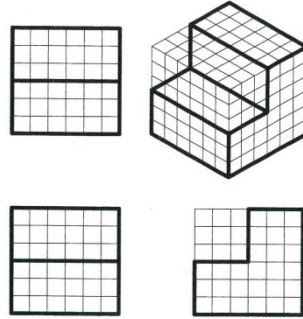


請參看範例：

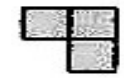
- 1.依據俯視圖、右視圖，選擇正確之立體視圖。
- 2.依據箭頭所表示方向，選擇正確之視圖。
- 3.每題10分，錯誤線條一條扣一分，扣完為止。

範例1



第一部份：製圖實習 60%

01.(A)

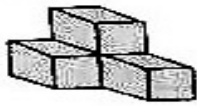


俯視圖

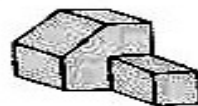


右視圖

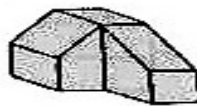
(A)



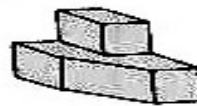
(B)



(C)




(D)



02.(B)




俯視圖




右視圖

(A)



(B)



(C)



(D)



03.(A)




俯視圖

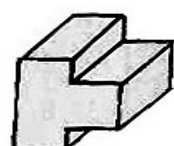


右視圖

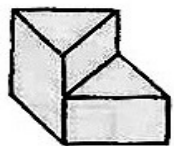
(A)



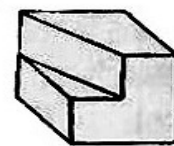
(B)



(C)



(D)



04.(B)




俯視圖

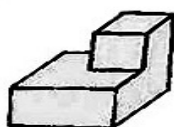


右視圖

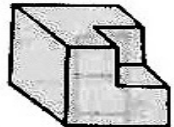
(A)



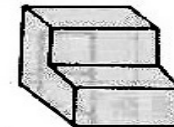
(B)




(C)



(D)



05.(A)



俯視圖



右視圖

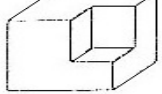
(A)



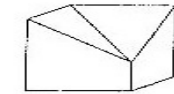
(B)



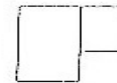
(C)



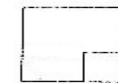
(D)



06.(A)

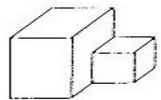


俯視圖

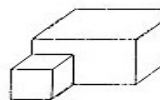


右視圖

(A)



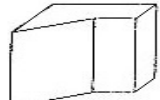
(B)



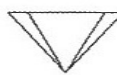
(C)




(D)



07.(B)

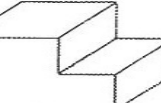


俯視圖

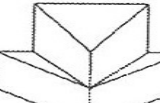


右視圖


(A)



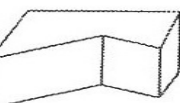
(B)



(C)



(D)



08.(D)

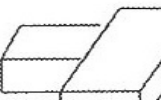


俯視圖



右視圖

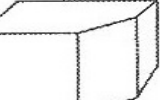
(A)




(B)



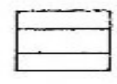
(C)



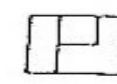
(D)



09.(B)

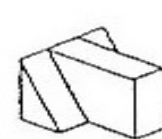


俯視圖



右視圖

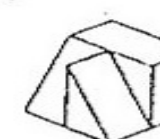
(A)



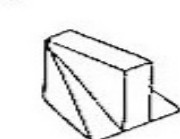
(B)



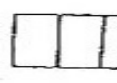
(C)



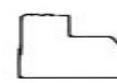
(D)



10.(C)



俯視圖

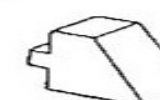


右視圖

(A)



(B)

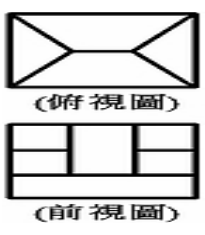
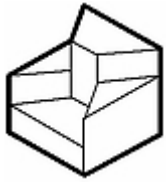
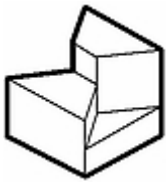
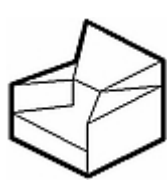
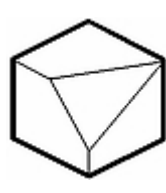


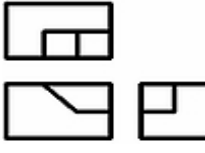




(C)

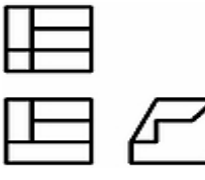






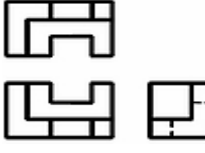




(D)

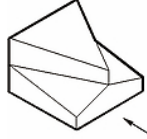
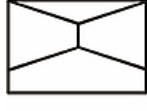





11.(A)  (A)  (B)  (C)  (D) 

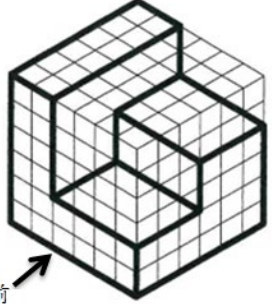


12.(D)  (A)  (B)  (C)  (D) 

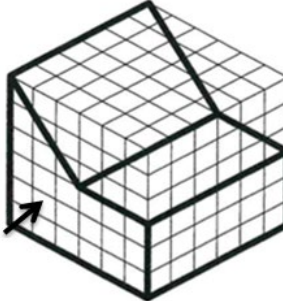


13.(A)  (A)  (B)  (C)  (D) 

14.(B)  (A)  (B)  (C)  (D) 

15.(B)  選擇正確的視圖 (A)  (B)  (C)  (D) 



第二部份:手繪製圖實習 20%

1. 俯視圖  前視圖  右側視圖 

2. 俯視圖  前視圖  右側視圖 

第三部份:游標卡尺實習 20%

1. 尺寸判讀:

(1)  (29.92mm) (2)  (30.32mm)

2. 游標卡尺操作:

請利用桌面上游標卡尺，將尺寸調整成 47.82mm

