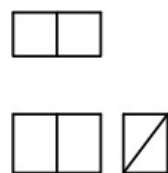
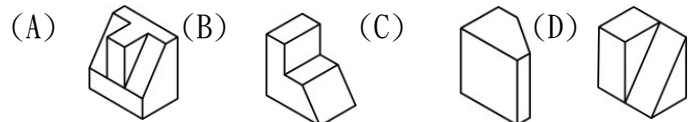
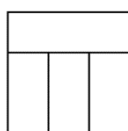
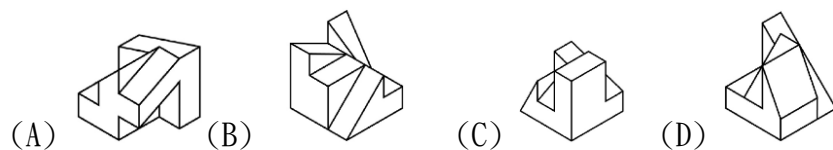


一、 單選題：(請依題意，選出一個正確或最佳答案)

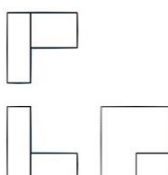
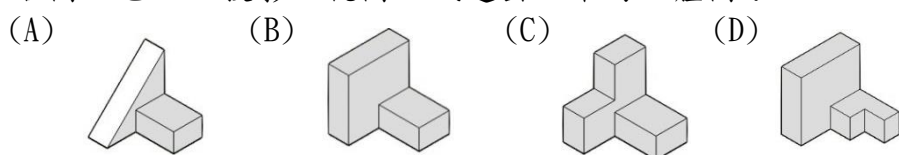
1. (D) 如右圖，已知正投影三視圖，試選出正確的立體圖？



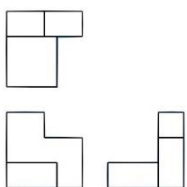
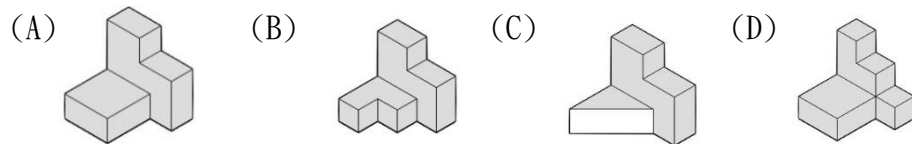
2. (B) 如右圖為下列哪一個立體圖的上視圖，試選出正確的立體圖？



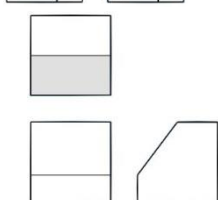
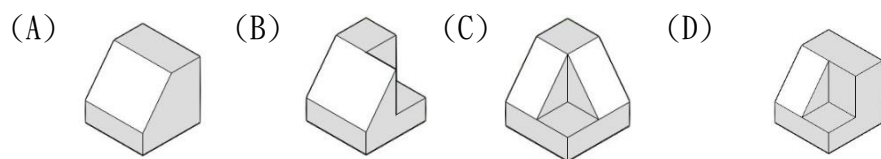
3. (B) 如右圖，已知正投影三視圖，試選出正確的立體圖？



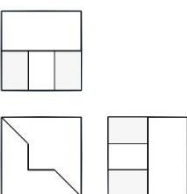
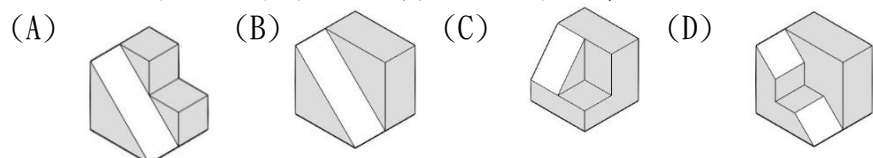
4. (A) 如右圖，已知正投影三視圖，試選出正確的立體圖？



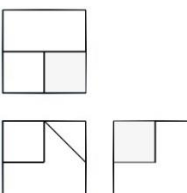
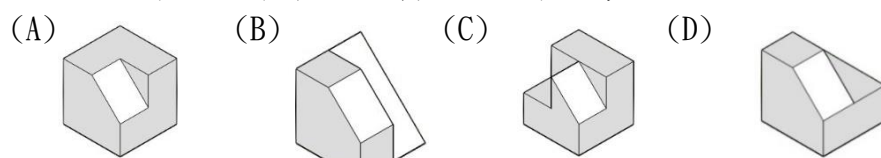
5. (A) 已知三視圖如右圖所示，則其立體圖應為



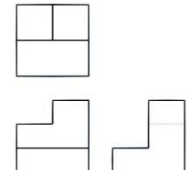
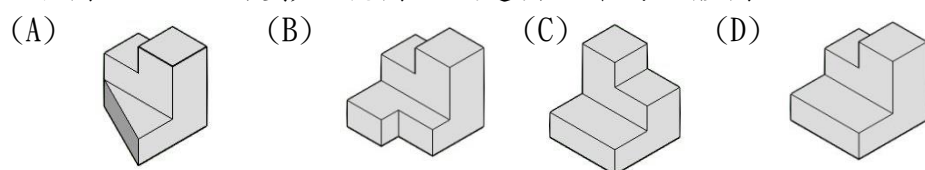
6. (D) 已知三視圖如右圖所示，則其立體圖應為



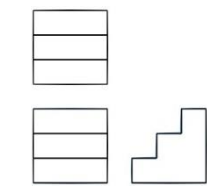
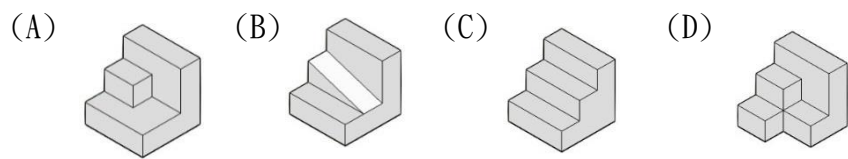
7. (C) 已知三視圖如右圖所示，則其立體圖應為



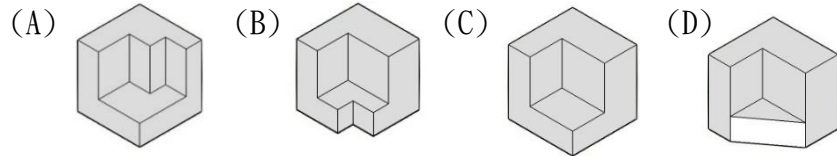
8. (D) 如右圖，已知正投影三視圖，試選出正確的立體圖？



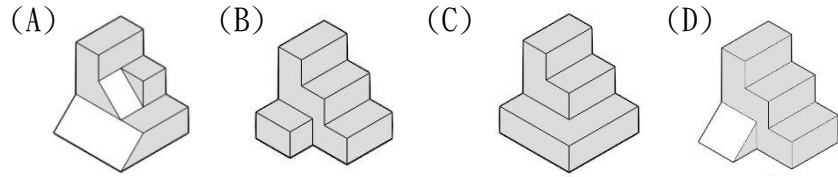
9. (C) 已知三視圖如下圖所示，則其立體圖應為



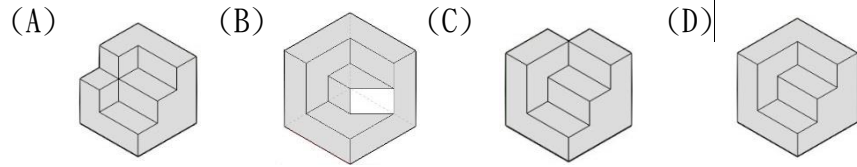
10. (C) 已知三視圖如下圖所示，則其立體圖應為



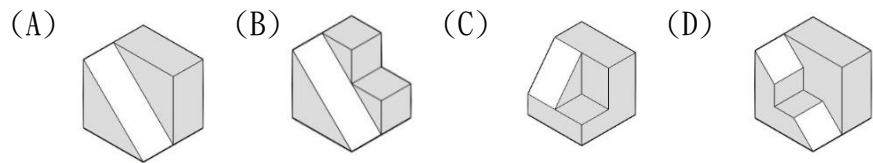
11. (A) 已知三視圖如下圖所示，則其立體圖應為



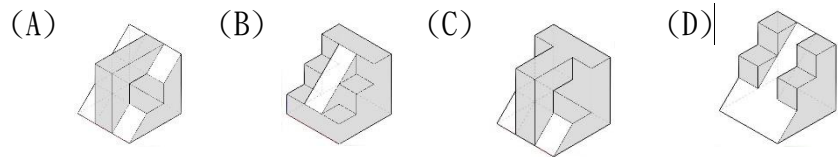
12. (D) 已知三視圖如下圖所示，則其立體圖應為



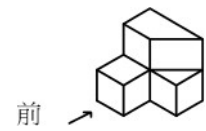
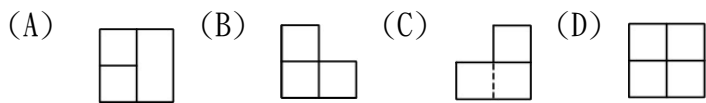
13. (B) 已知三視圖如下圖所示，則其立體圖應為



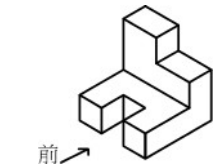
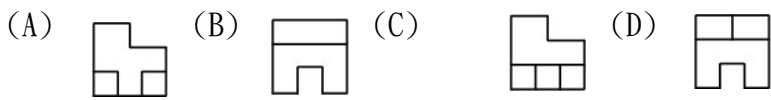
14. (A) 已知三視圖如下圖所示，則其立體圖應為



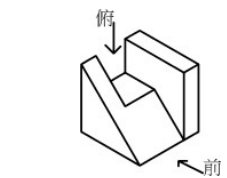
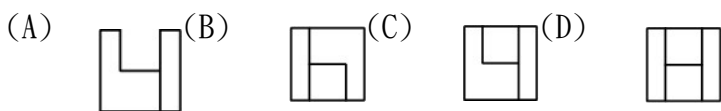
15. (D) 試依箭頭方向選出正確的前視圖：



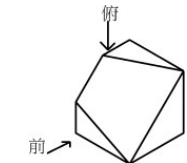
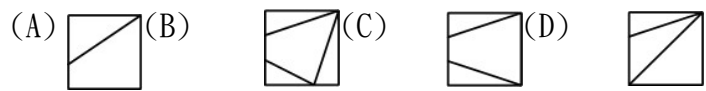
16. (C) 試依箭頭方向選出正確的前視圖：



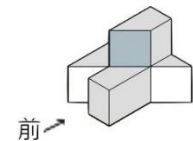
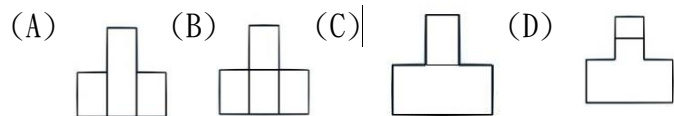
17. (C) 試依指定前視方向選出正確的俯視圖：



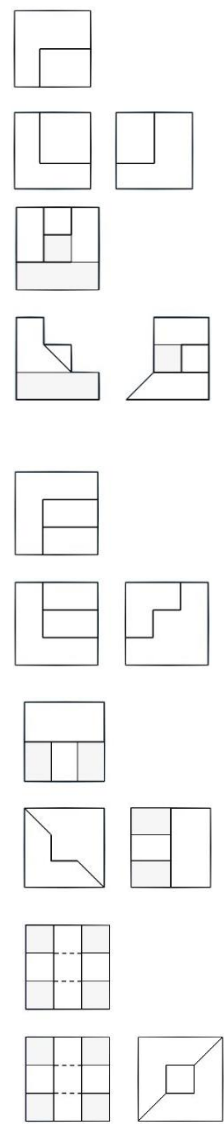
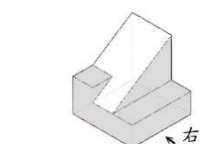
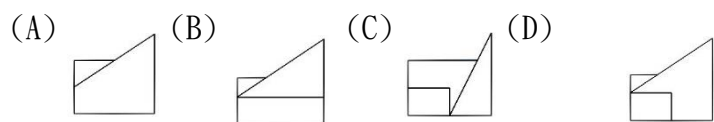
18. (A) 試依指定前視方向選出正確的俯視圖：



19. (B) 試依指定前視方向選出正確的前視圖：



20. (B) 試依指定前視方向選出正確的右側視圖：

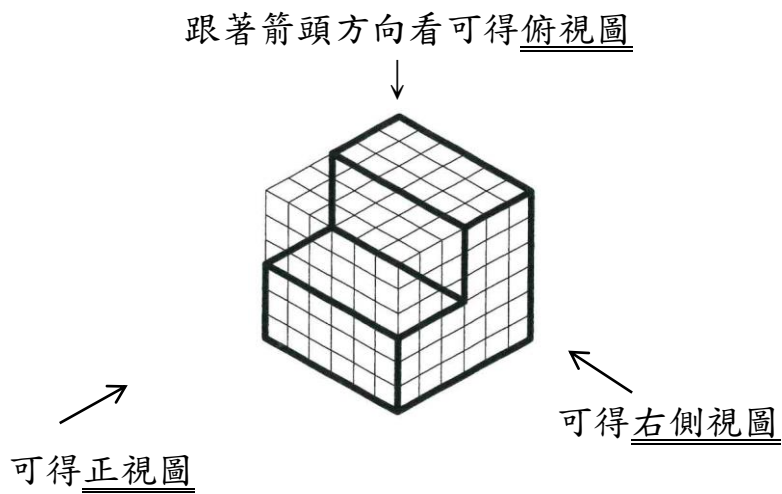


二、作圖題

試題說明：

- 1.請於答案卷作答，否則不予計分。
- 2.請將(1)~(2)立體圖，在答案紙上用筆畫出正確三視圖(俯視圖、正視圖、右側視圖)。
- 3.請參照下圖範例說明：


※題目:立體圖




※答案:畫出三視圖



俯視圖



正視圖



右側視圖

注意:請看立體圖長度，格線輔助，對照出三視圖線條長度。

- 4.每題 10 分，正視圖 4 分，俯視圖 3 分，右側視圖 3 分，各視圖錯誤線條一條扣一分，扣完為止。

國立北門高級農工職業學校

115 學年度特色招生專業群科甄選入學

土木 科 土木營造特色 班

答案卷

考生准考證號：_____

考生姓名：_____

答案卷有 1 頁，第 1 頁

彌封線

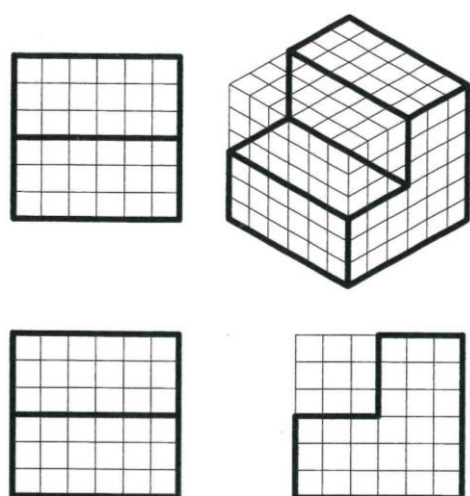
一、 單選題：

1	2	3	4	5	6	7	8	9	10
D	B	B	A	A	D	C	D	C	C
11	12	13	14	15	16	17	18	19	20
A	D	B	A	D	C	C	A	B	B

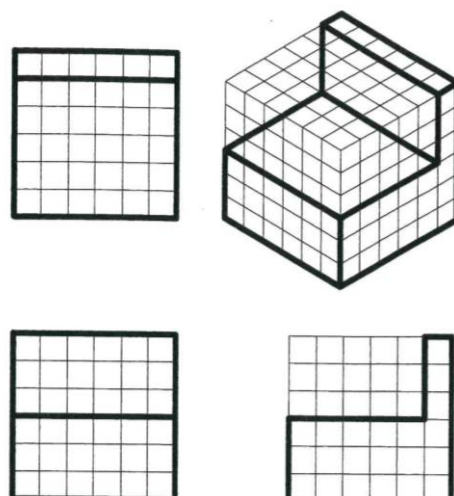
二、 作圖題：

請參照範例：

範例1

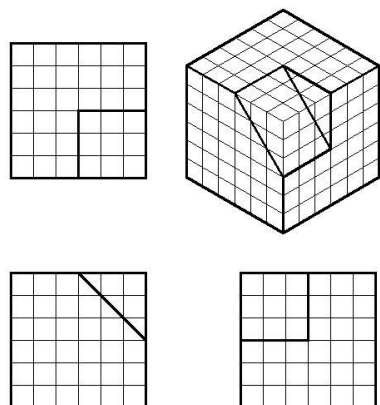


範例2

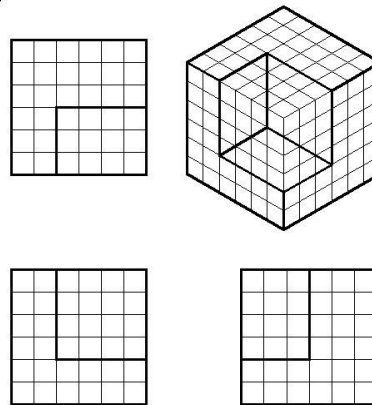


在以下區域開始作答：

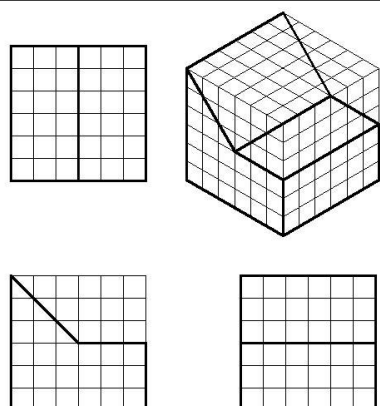
(1)



(2)



(3)



(4)

